

Orange H

1) 12×11

2) $3673 + 2.5$

3) $3751 - 399$

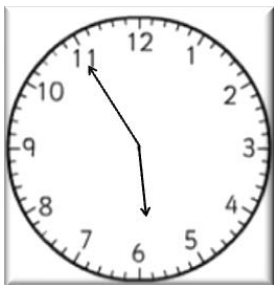
4) Which fractions are equal to one half?

$$\frac{10}{18} \quad \frac{12}{24} \quad \frac{4}{8} \quad \frac{6}{14} \quad \frac{3}{9}$$

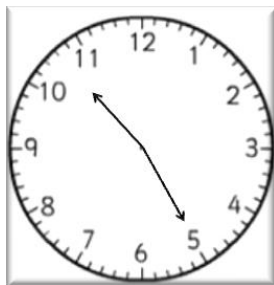
5) John has £56 all in pound coins.

He sorts them into 8 piles. How many coins in each pile?

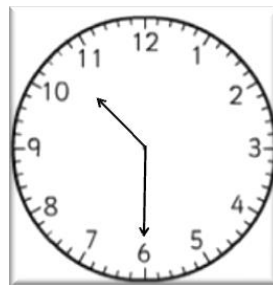
6) Which of these times is 10 minutes after 5:45?



A



B



C

7) To pass a test, you need to get at least half marks. Jim got 61%. Did he pass? Explain your answer.

8) What are the missing gaps?

$$21 + 21 + 21 + 21 + 21 + 21 = 21 \times \underline{\quad} = \underline{\quad}$$